

Şekil Sayı Eşleştirme

→
= 1

△
= 9

☆
= 7

○
= 2

+

□
= 5

▽
= 8


×

⬠
= 3

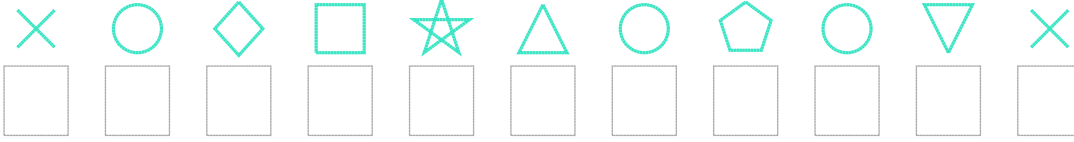
◇
= 0

Aşağıdaki uzun şifreleri hatasız çözerek altlarına yazın:

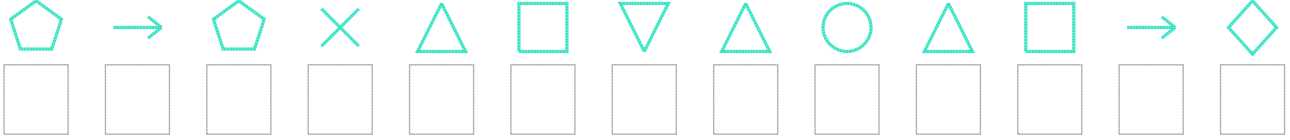
1. Şifre



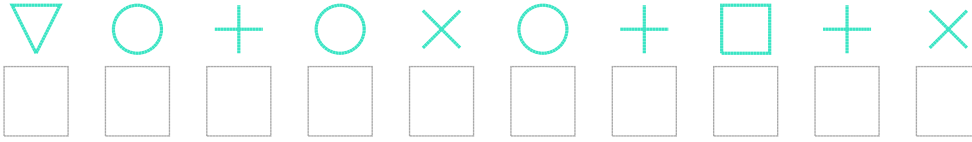
2. Şifre



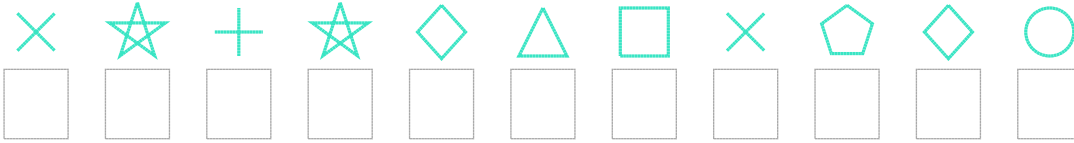
3. Şifre



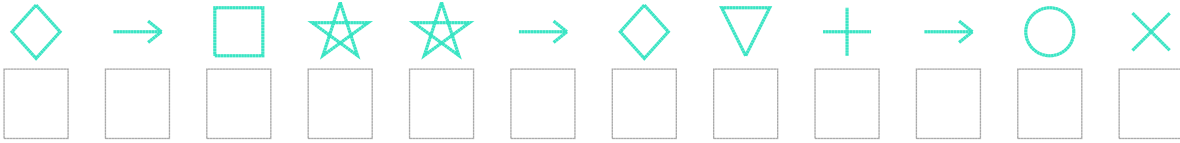
4. Şifre



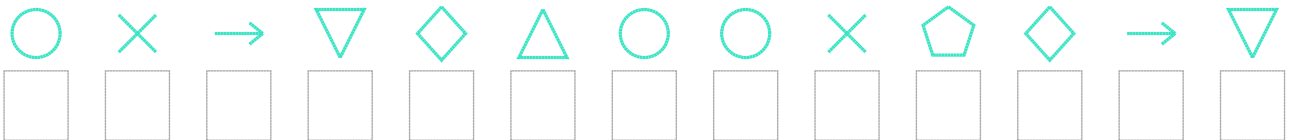
5. Şifre



6. Şifre



7. Şifre



□ BONUS: 7. ve 6. şifrenin üçüncü rakamının toplamı kaçtır?

Cevap Anahtarı

1. Şifre: 833256996
2. Şifre: 62057923286
3. Şifre: 3136958929510
4. Şifre: 8242624546
5. Şifre: 67470956302
6. Şifre: 015771084126
7. Şifre: 2618092263018

□ Bonus Soru Cevabı: 6